

Questionnaire “Logic and Computability”

Summer Term 2022

Contents

8	Transition Systems	1
8.1	Lecture	1
	8.1.1 Transition Systems	1
	8.1.2 Symbolic Encoding	1
8.2	Self-Assessment	2
	8.2.1 Transition Systems	2
	8.2.2 Symbolic Encoding	3

8 Transition Systems

8.1 Lecture

8.1.1 Transition Systems

1. [Lecture] Draw the graph for a *transition system* \mathcal{T} with: $S = \{s_1, s_2, s_3, s_4\}$,
 $S_0 = \{s_2\}$,
 $R = \{\{s_1, s_2\}, \{s_1, s_1\}, \{s_2, s_4\}, \{s_2, s_3\}, \{s_3, s_1\}, \{s_4, s_2\}, \{s_4, s_3\}\}$,
2. [Lecture] Consider the example of an elevator. Initially, the elevator is in the ground floor. From the ground floor, it can either go basement, stay there for a while, and then go back to the ground floor, or it can go from the ground floor to the second floor, stay there for a while, and go back to the ground floor. While traveling between ground floor to second floor, the elevator passes the first floor, but it cannot stop there.

Model this elevator as *transition system*.

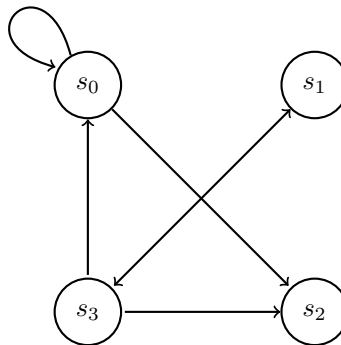
8.1.2 Symbolic Encoding

Symbolic Representation of States

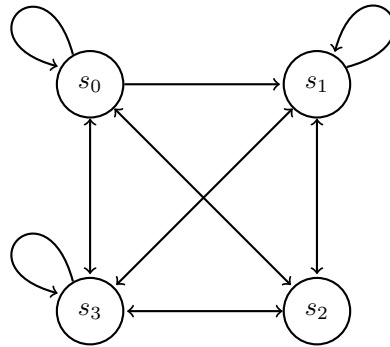
3. [Lecture] Given a state space of size $|S| = 2^4 = 16$, give the symbolic encoding for the following states: (a) s_7 , (b) s_{15} , and (c) s_{10} .
4. [Lecture] Given is the set of states $S = \{s_0, \dots, s_7\}$. Find formulas in propositional logic that symbolically represent the sets $A = \{s_7, s_6, s_3, s_2\}$, $B = \{s_1, s_3, s_5, s_7\}$, and $C = \{s_7, s_6, s_0, s_1\}$.

Symbolic Representation of the Transition Relation

5. [Lecture] Find a *symbolic encoding* for the *transition relation* of the following *transition system* and simplify your formulas. Use a binary encoding to encode the states, e.g., encode the state s_2 with the formula $v_1 \wedge \neg v_0$.



6. [Lecture] Find a *symbolic encoding* for the *transition relation* of the following *transition system* and simplify your formulas. Use a binary encoding to encode the states, e.g., encode the state s_2 with the formula $v_1 \wedge \neg v_0$.



Symbolic Encoding and Set Operations of Arbitrary Sets

7. [Lecture] Consider the domain $A = \{\text{Spain}, \text{France}, \text{Italy}, \text{Germany}\}$ and the two different symbolic encodings for A given below. Which one gives a shorter symbolic representation for the set $B = \{\text{France}, \text{Germany}\}$? Illustrate your answer by giving the representing formulas for B in both encodings.

Encoding 1		
Element	v_1	v_0
Spain	0	0
France	1	0
Italy	0	1
Germany	1	1

Encoding 2		
Element	v_1	v_0
Spain	0	0
France	1	0
Italy	1	1
Germany	0	1

8. [Lecture] Find a symbolic binary encoding for $X = \{0, 1, \dots, 31\}$. Use it to find formulas that symbolically represent the sets A and B and simplify the formulas:
- $A = \{12, 13, 14, 15, 28, 29, 30, 31\}$
 - $B = \{x \in X \mid 0 \leq x \leq 15\}$

Furthermore, give the formulas representing the sets $C = A \cap B$ and $D = A \cup B$.

8.2 Self-Assessment

8.2.1 Transition Systems

9. [Self-Assessment] Draw the graph for a *transition system* \mathcal{T} with:

$$S = \{s_0, s_1, s_2\},$$

$$S_0 = \{s_0, s_1\},$$

$$R = \{\{s_0, s_0\}, \{s_0, s_1\}, \{s_0, s_2\}, \{s_1, s_0\}, \{s_1, s_1\}, \{s_1, s_2\}, \{s_2, s_0\}, \{s_2, s_1\}, \{s_2, s_2\}\}.$$

10. [Self-Assessment]

Consider the example of a controller for a lamp.

Initially the light is off. Pressing the button once turns on the light and the light glows white. From this state, any short-lasting pressure of the button causes the light to switch its color randomly between white, red, green, blue, and yellow. At any state, pressing the button for a longer time turns the light off.

Model the lamp controller as *transition system*.

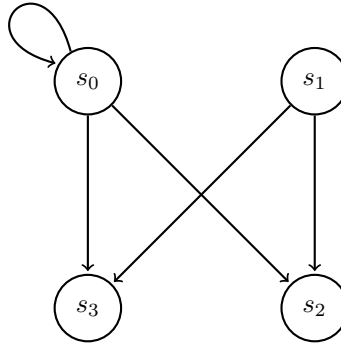
8.2.2 Symbolic Encoding

Symbolic Representation of States

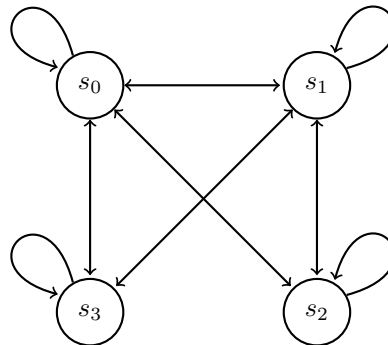
11. [Self-Assessment] Given a state space of size $|S| = 2^4 = 16$. Give the symbolic encoding for the following states: (a) s_4 , (b) s_9 , and (c) s_{13} .
12. [Self-Assessment] Given is the set of states $S = \{s_0, \dots, s_7\}$. Find formulas in propositional logic that symbolically represent the sets $A = \{s_0, s_2, s_4, s_6\}$, $B = \{s_0, s_1, s_2, s_3\}$, and $C = \{s_7, s_1\}$.

Symbolic Representation of the Transition Relation

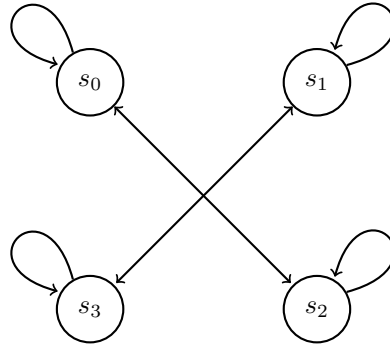
13. [Self-Assessment] Find a *symbolic encoding* for the set of initial states and the *transition relation* of the following *transition system* and simplify your formulas. Use a binary encoding to encode the states, e.g., encode the state s_2 with the formula $v_1 \wedge \neg v_0$.



14. [Self-Assessment] Find a *symbolic encoding* for the set of initial states and the *transition relation* of the following *transition system* and simplify your formulas. Use a binary encoding to encode the states, e.g., encode the state s_2 with the formula $v_1 \wedge \neg v_0$.



15. [Self-Assessment] Find a *symbolic encoding* for the set of initial states and the *transition relation* of the following *transition system* and simplify your formulas. Use a binary encoding to encode the states, e.g., encode the state s_2 with the formula $v_1 \wedge \neg v_0$.



16. [Self-Assessment] Define the *transition system* from the following symbolically encoded transition relations and draw the corresponding graph:

$$\begin{aligned}
 & (v_1 \wedge v_0 \wedge \neg v'_1 \wedge \neg v'_0) \vee \\
 & (\neg v_1 \wedge v_0 \wedge \neg v'_1 \wedge v'_0) \vee \\
 & (v_1 \wedge v_0 \wedge v'_1 \wedge v'_0)
 \end{aligned}$$

17. [Self-Assessment] Define the *transition system* from the following symbolically encoded transition relations and draw the corresponding graph:

$$\begin{aligned}
 & (\neg v_1 \wedge \neg v_0 \wedge v'_1 \wedge v'_0) \vee \\
 & (\neg v_1 \wedge v_0 \wedge \neg v'_1 \wedge \neg v'_0) \vee \\
 & (\neg v_1 \wedge \neg v_0 \wedge \neg v'_1 \wedge \neg v'_0)
 \end{aligned}$$

Symbolic Encoding and Set Operations of arbitrary Sets

18. [Self-Assessment] What is the main advantage of symbolic set operations over non-symbolic operations that enumerate all set elements explicitly?
19. [Self-Assessment] Listed are the participants of a seminar as well as their choice of snacks. Find a symbolic encodings for the participants. For for this encoding, give the symbolic representation of the set B of all participants that ordered *bananas*, and the set C of all participants that ordered cake.

Name	Snack
Alice	banana
Bob	cake
Carl	banana
David	banana
Eve	cake
Frank	cake
Greg	orange
Hank	cake

20. [Self-Assessment] Given a state space of size $|S| = 2048$, find a symbolic binary encoding for this state space and compute the characteristic function for the sets of states

$$B = \{s_0, s_1, s_2, \dots, s_{1023}\} \text{ and } C = \{s_{512}, s_{513}, s_{514}, \dots, s_{1535}\}$$

Then compute the characteristic function for the sets $D = B \cup C$ and $E = B \setminus C$. If possible, simplify the formulas.

21. [Self-Assessment] The following table shows eight students and their means of transportation. Find a symbolic encodings representing the list of students. For this encoding, give the symbolic representation of the set B of all students that go by *bike*, and the set C of all students that go by *car*.

Name	Transportation
Alice	Car
Bob	Bike
Carl	Tram
David	Bike
Eve	Tram
Frank	Bike
Greg	Tram
Hank	Bike

22. [Self-Assessment] Consider the domain $A = \{Spain, France, Italy, Germany\}$ and the two different symbolic encodings for A given below. Which one gives a shorter symbolic representation for the set $B = \{France, Italy\}$? Illustrate your answer by giving the representing formulas for B in both encodings.

Encoding 1		
Element	v_1	v_0
Spain	0	0
France	1	0
Italy	0	1
Germany	1	1

Encoding 2		
Element	v_1	v_0
Spain	0	0
France	1	0
Italy	1	1
Germany	0	1

23. [Self-Assessment] Consider the following set operations and relations between two sets X and Y , and an element a :
- Union: $X \cup Y$
 - Intersection: $X \cap Y$
 - Set Difference: $X \setminus Y$
 - Containment: $a \in X$?
 - Subset: $X \subseteq Y$?
 - Strict Subset: $X \subset Y$?
 - Emptiness: $X = \emptyset$?
 - Equality: $X = Y$?

Let x and y be the symbolic representations of X and Y respectively, and let a be the symbolic encoding of element a . For each of the following items, state which of the above operations is performed, or which of the above questions is answered. Write the letters of the corresponding operation/question into the boxes of the items below. Note that some of the items below do not perform any of the above operations or answer any of the above questions. Put a “-” in the box of these items. Also note that some of the items below might do the same computation or answer the same question.

- $\neg x \vee y$
- $x \wedge y$
- $x \equiv \top$?

- $x \equiv y?$
- $(x \rightarrow y) \wedge (y \rightarrow x)?$
- $x \equiv \perp?$
- $y \wedge \neg x$
- $x \rightarrow \perp?$
- $\alpha \models x?$
- $\alpha \models \neg x?$
- $\neg\alpha \models x?$
- $x \rightarrow \alpha?$
- $y \rightarrow x?$
- $x \rightarrow y?$
- $(x \rightarrow y) \wedge (x \neq y)?$

24. [Self-Assessment] Find a symbolic binary encoding for $X = \{0, 1, \dots, 31\}$. Use it to compute formulas in propositional logic that symbolically represent the following sets.

- $B = \{4, 5, 12, 13, 20, 21, 28, 29\}$
- $C = \{1, 2, 13, 14\}$

Compute the characteristic functions of the following sets by symbolic operations, using your results from before.

- (a) $D = B \cup C$
- (b) $E = X \setminus D$

25. [Self-Assessment] Find a symbolic binary encoding for $X = \{0, 1, \dots, 31\}$. Use it to compute formulas in propositional logic that symbolically represent the following sets.

- $B = \{x \in X \mid x \text{ is even}\}$
- $C = \{x \in X \mid x \text{ is odd}\}$
- $D = \{0, 1, 2, 3, 4, 5, 6, 7\}$

Compute the characteristic functions of the following sets by symbolic operations, using your results from before.

- (a) $E = B \cup D$
- (b) $F = C \cap E$
- (c) $G = E \setminus F$

26. [Self-Assessment] Find a symbolic binary encoding for $X = \{0, 1, \dots, 31\}$. Use it to compute formulas in propositional logic that symbolically represent the following sets.

- $B = \{8, 9, 10, 11, 12, 13, 14, 15\}$
- $C = \{x \in X \mid 0 \leq x \leq 15\}$

Compute the characteristic functions of the following sets by symbolic operations, using your results from before.

(a) $D = B \cup C$

(b) $E = B \cap C$

(c) $F = C \setminus B$

27. [Self-Assessment] Assume you are given the formulas a and b , which symbolically represent the sets A and B , respectively. Give the formula c , which symbolically represents the set $C = A \setminus B$.
28. [Self-Assessment] Assume you are given the formulas a and b , which symbolically represent the sets A and B , respectively. What would you have to check on a, b to test whether or not A is a strict subset of B , i.e., $A \subset B$?
29. [Self-Assessment] Given a state space of size $|S| = 64$. Find a symbolic binary encoding for this state space and compute the formulas that symbolically represent the sets

$$B = \{s_{32}, s_{33}, s_{34}, \dots, s_{63}\} \text{ and } C = \{s_{16}, s_{17}, s_{18}, \dots, s_{40}\}.$$

Following, compute the formulas that represent the sets $D = B \cap C$, $E = B \cup C$, $F = B \setminus C$ and $G = C \setminus B$.

30. [Self-Assessment] Given a state space of size $|S| = 64$, find a symbolic binary encoding for this state space and compute the formulas that symbolically represent the sets of states

$$B = \{s_{16}, s_{17}, s_{18}, \dots, s_{32}\} \text{ and } C = \{s_{24}, s_{25}, s_{26}, \dots, s_{64}\}.$$

Then compute the formulas that symbolically represent the sets $D = B \cap C$ and $E = B \cup C$.